
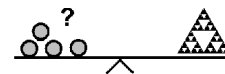


Name: \_\_\_\_\_

Klasse: \_\_\_\_\_



## Minikänguru 2020 I-Kinder



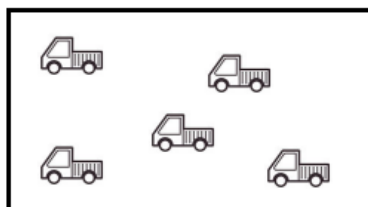
**Kreuze die Antwort an.**

**A-1**

Welcher Bär ist am größten?



**A-2**



Wie viele Autos sind es?

5	6	4
---	---	---

**B-1**


$$\begin{array}{c}
 \boxed{\begin{array}{c} \text{duck} \\ \text{duck} \end{array}} + \boxed{\begin{array}{c} \text{duck} \\ \text{duck} \end{array}} = \boxed{\begin{array}{c} \text{duck} \text{ duck} \\ \text{duck} \text{ duck} \end{array}} \\
 \mathbf{2} \quad \mathbf{+} \quad \mathbf{3} \quad \mathbf{=}
 \end{array}$$

3	4	5
---	---	---

**B-2**

$$6 - 3 = 3$$

2	3	4
---	---	---


**C-1**

Wovon gibt es 4?

**C-2**

Zeichne und rechne.

Mia hat 2 Bälle. Ole hat 1 Ball. Ali hat 3 Bälle.



Wie viele Bälle sind es?

5	4	6
---	---	---