
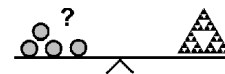


Name: _____

Klasse: _____



Minikangaroo 2020 - 2nd grade



A-1

$$20 - 20 + 2 - 0 + 2 - 0 =$$

44	24	18	4	22

A-2

The kangaroo writes the word

KANGAROO

4 times in a row.

How often does it write the letter A?

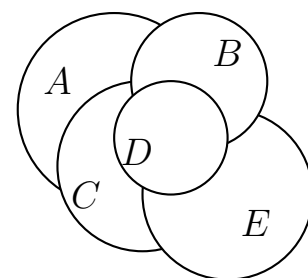
4	8	10	6	7

A-3

Five circles were placed in a pile on top of each other.

Which was the second circle that was placed on the pile?

A	B	C	D	E



A-4

The frog jumps 2 meters. The kangaroo jumps 2 meters further.

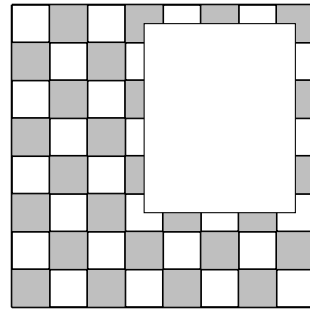
How many meters do frog and kangaroo jump together?

4	2	5	8	6

A-5

How many gray fields are not visible at all?

6	4	8	10	2

**B-1**

A chicken needs 3 weeks to hatch 12 eggs at the same time.



How long does it take for 4 eggs?

3 weeks	4 days	4 weeks	2 weeks	6 days


B-2

The girls Lia and Mia and the boys Leo, Ole and Ali are standing in a row.

Lia is standing between Ole and Leo.

Leo is standing at one end of the row.

Ali is wearing a t-shirt with a football.



Which child is Mia?

A	B	C	D	E

B-3

Father buys 4 packages of sugar and 3 packages of flour. Exactly 2 packages fit in a bag.

What is the minimal number of bags he needs?


2	3	4	5	6

B-4

The clock is exactly 15 minutes too fast.

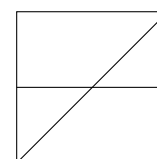
What is the correct time?

3:05 a.m.	3:20 a.m.	3:15 a.m.	2:55 a.m.	2:50 a.m.

**B-5**

Count all triangles. How many triangles are there?

0	2	3	4	6

**C-1**

10 tulips in the colors red, yellow and white grow in the garden.



3 tulips are yellow, 7 tulips are not red.

How many tulips are white?

3	4	5	6	7

C-2

The kangaroo jumps to school witch takes 18 minutes. On the way back it jumps three times as fast.

How long does it take to get back?

12 minutes	54 minutes	6 minutes	18 minutes	9 minutes

C-3

$$x + x + x < 24$$

What is the largest number you can use for x?

5	7	6	9	8

C-4

The kangaroo writes four of the numbers

13,14,17,18,20

into the empty boxes. In each box is a different number.

$$\square + \square = \square + \square$$

Which number is left?

13	15	17	19	20

C-5

The lion is running from 1 to 3.

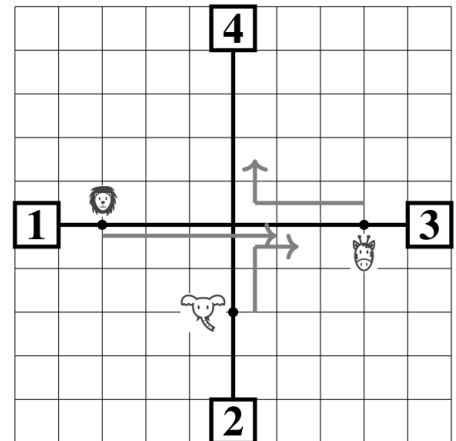
The elephant is running from 2 to 3.

The giraffe is running from 3 to 4.

No animal leaves the black path.

All animals are running at the same speed.

At 10:00 a.m. the photo was taken on the right.



A

B

C

D

E

Which photo was taken at 10:15 a.m.?

A	B	C	D	E