
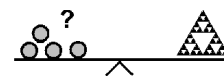


Name: _____

Class: _____



Mini Kangaroo Competition 2021 2nd grade




A-1

$$20 + 21 - 2 + 0 + 2 - 1 =$$

40	37	42	36	41

A-2



4	6	10	15	20

How many animals are there?

A-3

There are 3 sheep, 2 rabbits, 6 ducks and 10 goldfish in the zoo.

How many legs do the animals have together?

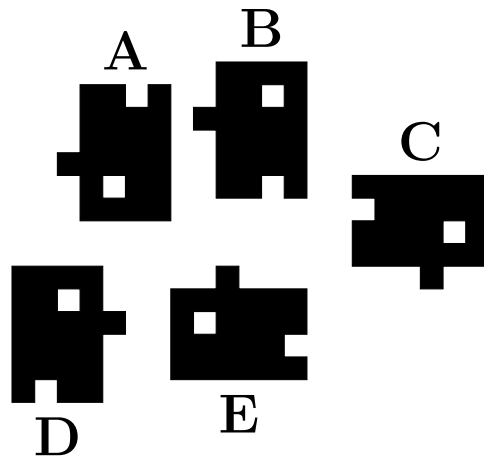
42	24	32	30	21

A-4

How heavy might a kangaroo be?

3 cm	3 m	3 km	3 kg	3 mm

A-5



4 of these objects are the same. Which one is different?

A	B	C	D	E

B-1

The kangaroo has 14 more cookies than the panda.

How many cookies does the kangaroo have to give the panda so that both have the same number of cookies?

8	4	6	10	7

B-2

9 16 23 30 44

Which number is missing?

37	35	39	38	36

B-3

A train passes through a level crossing. The kangaroo counts the carriages.

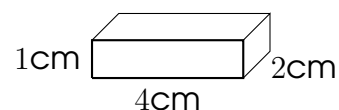
There are 8 blue carriages, 5 green carriages and three times as many red carriages as green carriages.

How many carriages does the train have altogether?

23	28	33	16	24

B-4

The kangaroo has 3 identical building blocks. It builds the highest possible tower with these building blocks.



How high is the tower?

9 cm	15 cm	7 cm	3 cm	12 cm

B-5

A lap of the swimming pool is 25 metres. The kangaroo swims 75 metres.

How many laps does the kangaroo swim?

6	2	3	4	5

C-1

22 children go up the mountain in cable cars. 6 children fit in one cable car. All 22 children get in the cable cars one after the other.

What is the smallest number of cable cars the children need to go up the mountain?

7	5	3	4	6


C-2

Some birds are sitting in the tree. 4 more birds fly up the tree. This happens 4 times. Now there are 25 birds in total.

How many birds were sitting in the tree at the start?

10	8	16	11	9

C-3

**START**

Two turtles go for a race. A turtle runs 4 metres in a minute. The other turtle runs 3 metres in a minute. How many metres apart are the two turtles 5 minutes after takeoff?

7m	5m	4m	8m	6m

C-4

The bell rings once at 1 a.m., twice at 2 a.m., three times at 3 a.m. and so on. How often does the bell ring between 5:30 a.m. and 12:15 p.m.?

6 times	68 times	51 times	7 times	63 times

C-5

A full box of apples weighs 17kg. Two empty boxes of the same size weigh 10kg. How much do the apples weigh?

12kg	7kg	9kg	10kg	13kg