



Name: _____

Class: _____

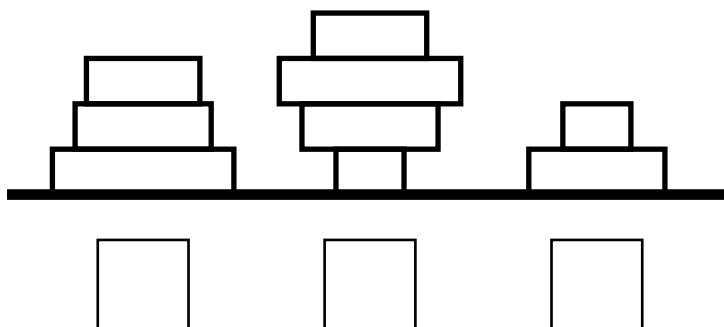


Mini Kangaroo Competition 2024 I-Kids




A-1

Which tower is the tallest?



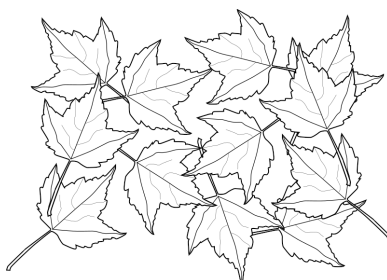
A-2



How many fish are swimming to the RIGHT?

3	2	5
---	---	---


B-1



How many leaves are there?

12	13	11
----	----	----


B-2




Which animal is between the elephant and the giraffe?




C-1



Mia has more cookies than Leo.
How many more cookies does Mia have?



C-2



All cards are face up.
Only the black card is face down.
What picture is on the other side?

